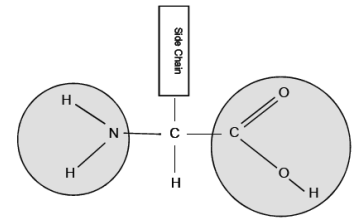


Excretory System

Excretion =

Metabolism =

(Use the Metabolism Graphic Organizer Sheets for the next section)



Nitrogenous wastes: From _____ of amino acids

Nitrogen excretion

Organism	Form of nitrogenous waste
	→
	→
	→

Liver:

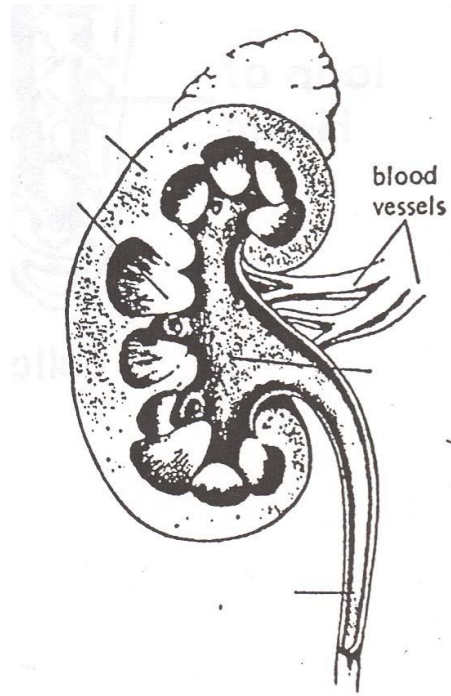
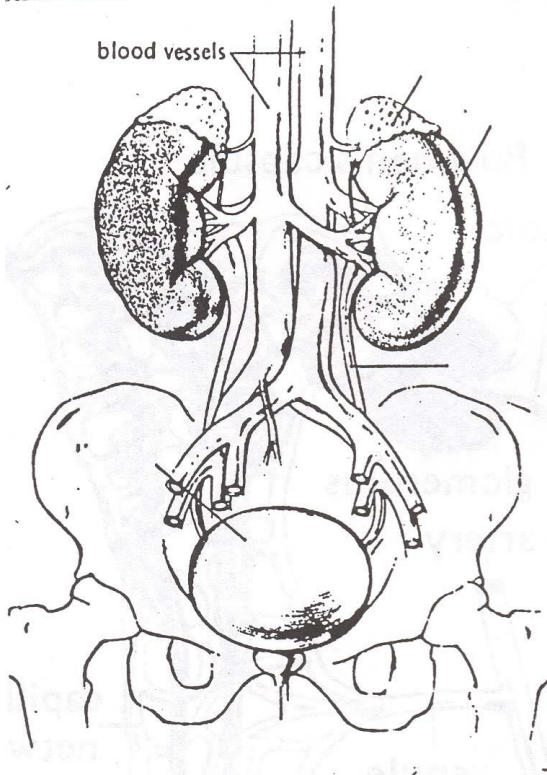
Excretory organ

Excretory product

Compounds excreted

Why are feces not a great example of an excretory product?

Urinary System



Nephron:

How to make urine:

Step 1:

Step 2:

